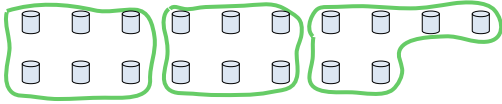
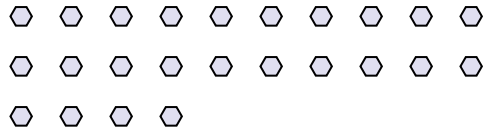


Use the shapes provided to answer the questions.

Ex) How many groups of 6 can you make with the 18 shapes below?




1) How many groups of 4 can you make with the 24 shapes below?



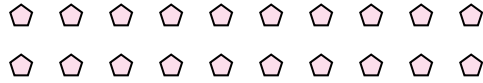
**Answers**

Ex. 3

2) How many groups of 8 can you make with the 16 shapes below?



3) How many groups of 5 can you make with the 20 shapes below?



1. \_\_\_\_\_


2. \_\_\_\_\_

3. \_\_\_\_\_

4. \_\_\_\_\_

5. \_\_\_\_\_

4) How many groups of 5 can you make with the 40 shapes below?



5) How many groups of 7 can you make with the 14 shapes below?




6. \_\_\_\_\_

7. \_\_\_\_\_

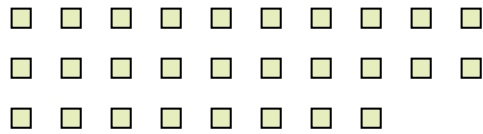
8. \_\_\_\_\_

9. \_\_\_\_\_

6) How many groups of 4 can you make with the 24 shapes below?




7) How many groups of 7 can you make with the 28 shapes below?



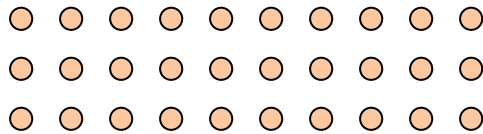
10. \_\_\_\_\_

11. \_\_\_\_\_

8) How many groups of 7 can you make with the 35 shapes below?




9) How many groups of 6 can you make with the 30 shapes below?



10) How many groups of 5 can you make with the 25 shapes below?



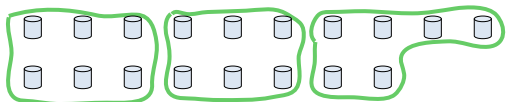
11) How many groups of 2 can you make with the 34 shapes below?



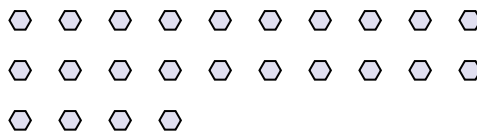


Use the shapes provided to answer the questions.

Ex) How many groups of 6 can you make with the 18 shapes below?



1) How many groups of 4 can you make with the 24 shapes below?



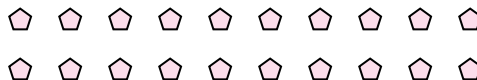
Answers

Ex. 3

2) How many groups of 8 can you make with the 16 shapes below?




3) How many groups of 5 can you make with the 20 shapes below?



1. 6

2. 2

4) How many groups of 5 can you make with the 40 shapes below?



5) How many groups of 7 can you make with the 14 shapes below?



3. 4

4. 8


5. 2

6. 6

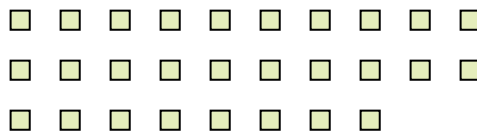
7. 4

8. 5

6) How many groups of 4 can you make with the 24 shapes below?



7) How many groups of 7 can you make with the 28 shapes below?




9. 5

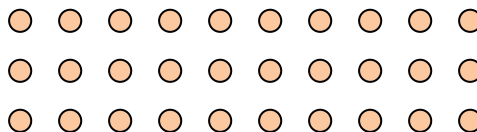
10. 5

11. 17

8) How many groups of 7 can you make with the 35 shapes below?



9) How many groups of 6 can you make with the 30 shapes below?



10) How many groups of 5 can you make with the 25 shapes below?



11) How many groups of 2 can you make with the 34 shapes below?

